


Find the area and the perimeter of each shape.

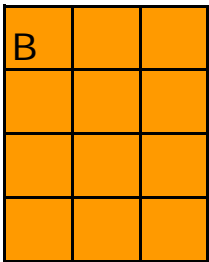
(if each square is 1cm x 1cm*)



A

Area _____

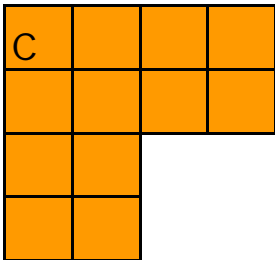
Perimeter _____



B

Area _____

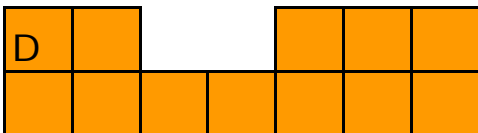
Perimeter _____



C

Area _____


Perimeter _____



D

Area _____

Perimeter _____



E

Area _____

Perimeter _____

Which shape is the odd one out and why?

*not drawn to scale