


Name: . . . . .

Symmetry.


Name the shapes below, then draw and count the lines of symmetry.




Name. . . . .  
Lines of symmetry . . .



Name. . . . .  
Lines of symmetry . . .




Name. . . . .  
Lines of symmetry . . .




Name. . . . .  
Lines of symmetry . . .



Name. . . . .  
Lines of symmetry . . .



Name. . . . .  
Lines of symmetry . . .



Name. . . . .  
Lines of symmetry . . .