








Name

Date:

Cake Sale

Calculate the total cost of the items in each row then work out how much change you would get from £5








 15p	 20p	 £1.50	 12p	 10p	 25p	 50p	Total cost	Change from £5
1	2			1				
	1	1	1	1	1	1		
2			2	4	1	2		
	3		6	5	3			
1	5		4	5	1	3		
1	1	1	1	1	1	1		
2	2	2	2	2	2	2		
3	1		3	2	5	1		
4					6			
5	4		5	3	4			
3	3		3	6	1	4		

Name

Date:

Cake Sale

Calculate the total cost of the items in each row then work out how much change you would get from £10

 25p	 99p	 £1.50	 34p	 10p	 24p	 49p	Total cost	Change from £10
1	2			1				
	1	1	1	1	1	1		
2			2	4	1	2		
	3		6	5	3			
1	5		4	5	1	3		
1	1	1	1	1	1	1		
2	2	2	2	2	2	2		
3	1		3	2	5	1		
4					6			
5	4		5	3	4			
3	3		3	6	1	4		