

Name:.....

# Addition and Subtraction Problems

Complete these mathematical problems. Write your answers in the space provided.




1) If John has 58 toy cars and Tom has 70 toy cars, how many toy cars do they have altogether?





2) One farmer has 136 lambs and another has 87. How many more lambs does the first farmer have?



3) A grocer sold 27 bags of sweets on Monday, 35 bags on Tuesday and 18 bags on Wednesday. How many did he sell in those three days?



4) An orchard contains 25 apple trees, 19 pear trees and 8 plum trees. How many trees in the orchard?



5) A man bought a pack of 150 envelopes. After using 87 and giving away 25, how many did he have left?

