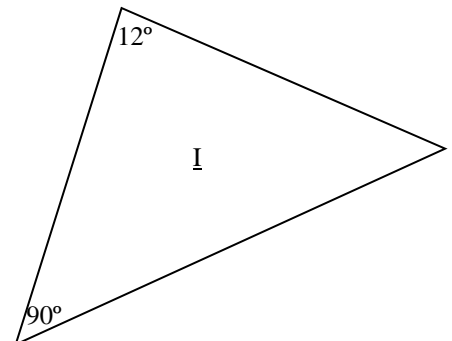
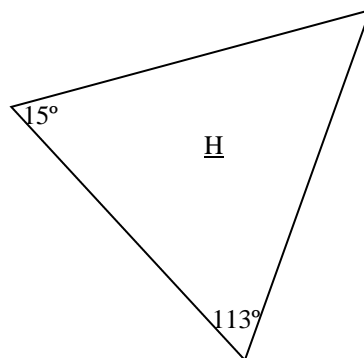
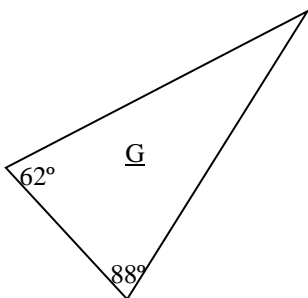
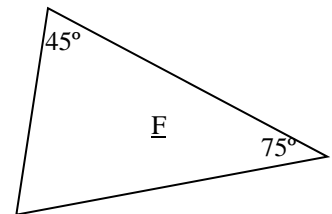
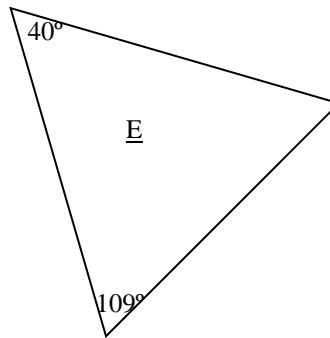
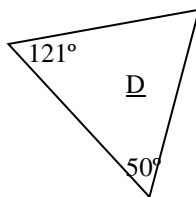
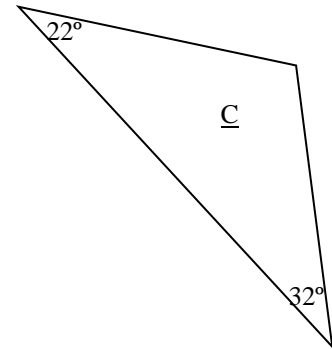
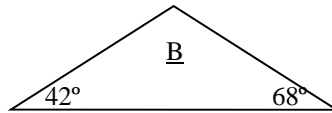
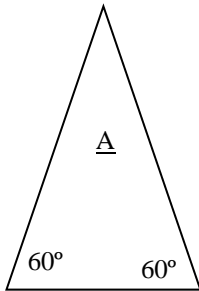


LO: To find the missing angle from a triangle.

DO NOT measure these angles—they are NOT drawn accurately.

Instead, use our method that we discussed. Please write the answers in your books.



Extension 1: Write a definition for each of these types of triangles: Isosceles, Right-Angled, Equilateral and Scalene.

Extension 2: Collect a 2D shape. What do each of its angles add up to? Try another shape with the same amount of sides. Is there a pattern?