

Name.....

Swimming

Swimming Pool



Open



Closes

1. When does the pool open? _____

2. Tick which time it closes

- a) 9:11 b) 12:45 c) 9:55 d) 11:45

3. Debbie goes swimming at 10:30
She swims for 40 minutes.

When did she get out? _____

4. a) How much for 2 children to swim? _____

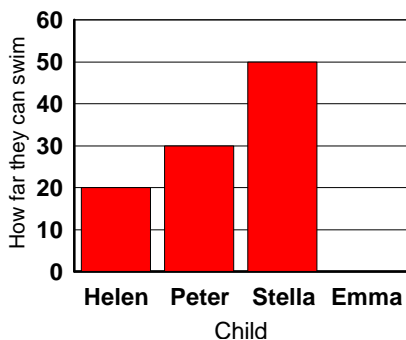
b) How much for 2 adults to swim? _____

c) How much for 1 adult and 1 child to swim? _____

d) If a child paid for the swimming with 3 coins which coins would they be? _____

e) If an adult paid with a £2 coin, how much change would they get? _____

5. Some children made a graph of how far they could swim



a) Emma can swim 40 metres.
Show this on the graph

b) Stella can swim further than Helen.
How much further? _____

6. This table shows how the children travel to the swimming pool

Ways of Travelling	Number of children
walk	13
taxi	1
bus	7
car	9


a) More children walk than get the bus.
How many more? _____

b) How many children altogether? _____

c) On a rainy day 3 children went by bus instead of walking.
How many walked in the rain? _____

How many got the bus in the rain? _____

7. apples 30p

Emma has 6p. She wants  to buy an apple.

How much more money does she need? _____

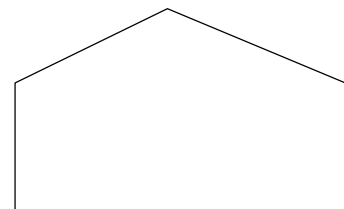
8. How much would two apples cost? _____

9. A class of 30 children go swimming.

a) How many pairs of children are there? _____

b) They then go into groups of 10.
How many groups are there? _____

10. This is a plan of the pool.



a) Mark on it the two right angles.

b) What shape is the pool?

- square rectangle pentagon hexagon**