





Emma is 93 cm. tall.
David is 107 cm. tall.
How much taller is David than Emma? _____ cm.

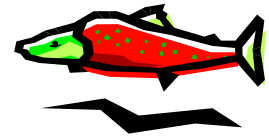


1. In purse 1 there is £1.29.
2. In purse 2 there is £1.71.

How much more is there in purse 2 than purse 1?
_____p




Shark



Salmon

The shark is 142cm. long.
The salmon is 53cm. long.

How much longer is the shark than the salmon? _____ cm.




Jane read a book with 68 pages.
Louis read a book with 85 pages.
How much shorter was Jane's book than Louis's? _____



A bull weighs 550 kg.
A bear weighs 330 kg.
How much lighter is the bear than the bull?
_____ kg.



Chelsea scored 67 goals last season.
Liverpool scored 49 goals.
How many more goals did Chelsea score than Liverpool?



John had had his computer game for 1 year and 2 months.
Hans had had his for 2 years and 1 month.
How much longer had Hans had his than John? _____




Doris is 87 years old.
Bertie is 101 years old!
How much younger is Doris than Bertie?



There are 23 frogs in the river.
There are 134 fish in the river.
How many less frogs are there than fish in the river? _____




Emma is 93 cm. tall.
David is 1 metre, 27 cm. tall.
How much taller is David than Emma? _____ cm.



1. In purse 1 there is £9.29.
2. In purse 2 there is £10.71.

How much more is there in purse 2 than purse 1?
_____p




Shark




Salmon


The shark is 142cm. long.
The giant salmon is 1 metre and 11cm. long.
How much longer is the shark than the salmon? _____ cm.




Jane read a book with 68 pages.
Louis read a book with 215 pages.
How much shorter was Jane's book than Louis's? _____



A bull weighs 555 kg.
A bear weighs 336 kg.
How much lighter is the bear than the bull?
_____ kg.



Chelsea scored 139 goals last season.
Liverpool scored 49 goals.
How many more goals did Chelsea score than Liverpool?



John had had his computer game for 1 year and 2 months.
Hans had had his for 25 months.
How much longer had Hans had his than John? _____




Doris is 87 years old.
Bertie is 101 years old!
How much younger is Doris than Bertie?



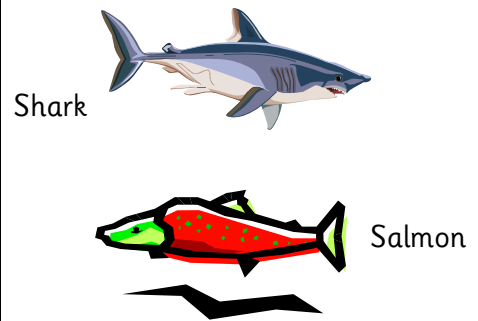
There are 23 frogs in the river.
There are 111 fish in the river.
How many less frogs are there than fish in the river? _____



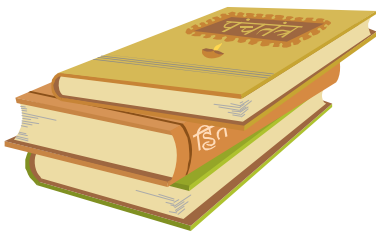
Emma is 90 cm. tall.
David is 100 cm. tall.
How much taller is David than Emma? _____ cm.



In purse 1 there is 10p.
In purse 2 there is 20p.
How much more is there in purse 2 than purse 1?
_____p



The shark is 50cm. long.
The salmon is 40cm. long.
How much longer is the shark than the salmon? _____ cm.



Jane read 3 books.
Louis read 12.
How many more books did Louis read than Jane? _____



A motorbike has 2 wheels.
A truck has 10 wheels.
How many more wheels does a truck have than a motorbike? _____



Chelsea scored 30 goals last season.
Liverpool scored 20 goals.
How many more goals did Chelsea score than Liverpool?



John had 15 presents in his Christmas stocking.
Hans had 25 presents in his.
How many less presents did John get than Hans? _____



Callum is 4 years old.
His brother, Bob, is 11 years old.
How much younger is Callum than Bob?
_____ years



There are 23 frogs in the river.
There are 34 fish in the river.
How many less frogs are there than fish in the river? _____