
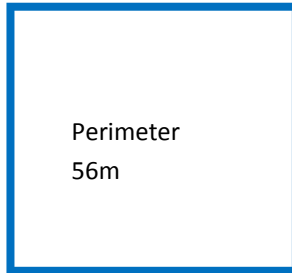
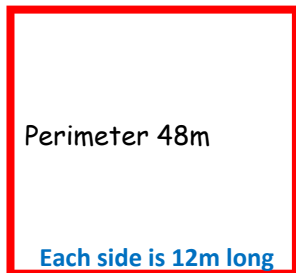




Using Area and Perimeter

Here are the perimeters of some squares. Find how long each side is. The first one is done for you. Then calculate the area using **Area=LxW**

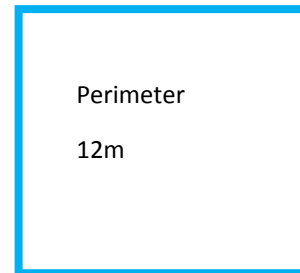
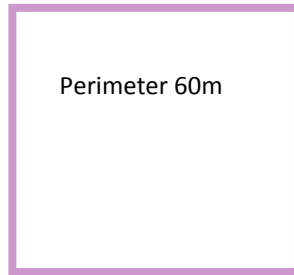


$$\begin{array}{r} 12\text{m} \\ 4 \overline{) 48\text{m}} \end{array}$$

Area= $12 \times 12 = 144\text{m}^2$

Area=

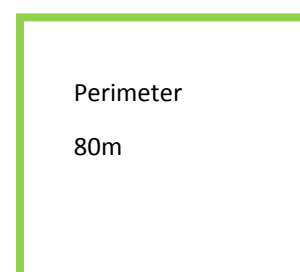
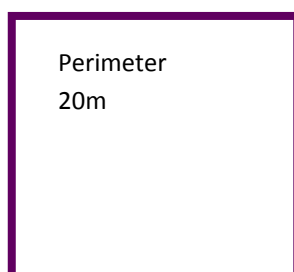
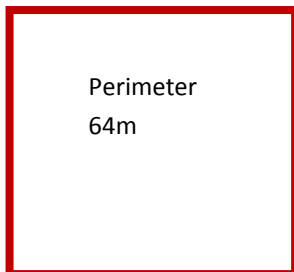
Area=



Area=

Area=

Area=



Area=

Area=

Area=