

AVERAGES

1



Tom 4 goals



John 6 goals



Tim 2 goals



Sam 4 goals




Tony 4 goals




Peter 4 goals

The boys in the team all scored goals during the season. What was the total number of goals scored by them? What is the average number of goals scored?


2




Bus 10 carries 20 passengers



Bus 40 carries 10 passengers



Bus 20 carries 5 passengers



Bus 100 carries 9 passengers

How many people travelled on the four buses? What was the mean passenger load? If each passenger was charged the same as the bus number in pence. how much did each bus collect? What was the mean amount collected between the four buses?

3 3 meter of rope 5 meter of rope 15 meter of rope 5 meter of rope

Jenny

Sally

Betty

Molly

What is the total length of the rope? If we shared the rope out equally, how much would each one get? What is the average length of the four pieces of rope?

4 *If Sally and Betty joined their ropes, what would their total length be?*

They now share the total equally what length will each get? What is the mean length of the two pieces?

5



3kg



6kg



9kg



22kg



28kg



1kg



6kg



5kg

What is the total mass of the fish? What is the mean weight of the fish?



Monday
10 hours



Tuesday
4 hours




Wednesday
10 hours



Thursday
14 hours



Friday
12 hours



What is the mean hours of daylight over the week?

What is the mean for [a] Monday and Tuesday, [b] the first three days,

[c] the last two days, and [d] the last three days?