
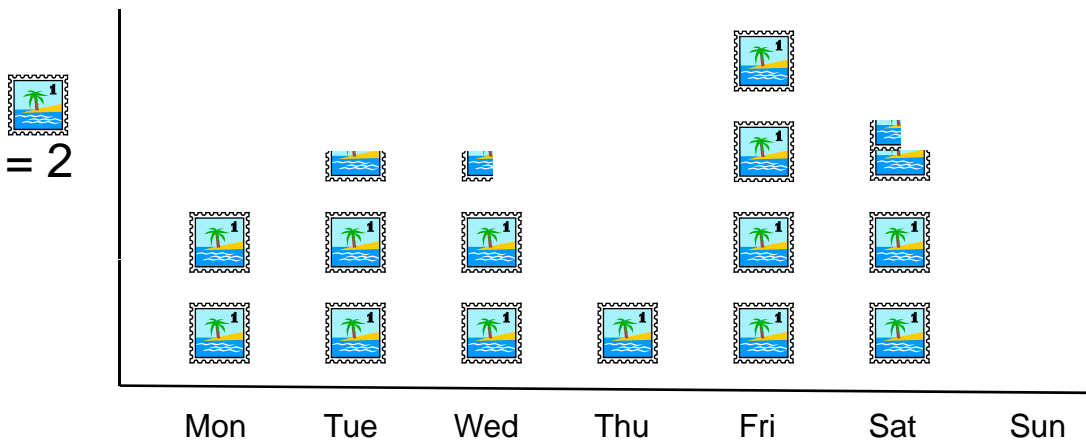




Burgers sold from a Burger Van



1. How many burgers were sold on each day?
2. Which day sold the most burgers?
3. Which day sold the least burgers?
4. How many more burgers were sold on Monday than Tuesday?
5. How many less were sold on Thursday than Wednesday?
6. Why were none sold on Sunday?




1. How many stamps were sold on each day?
2. Which day sold the most stamps?
3. Which day sold the least stamps?
4. How many more stamps were sold on Monday than Tuesday?
5. How many less were sold on Thursday than Wednesday?
6. Why were none sold on Sunday?



Burgers sold from a Burger Van



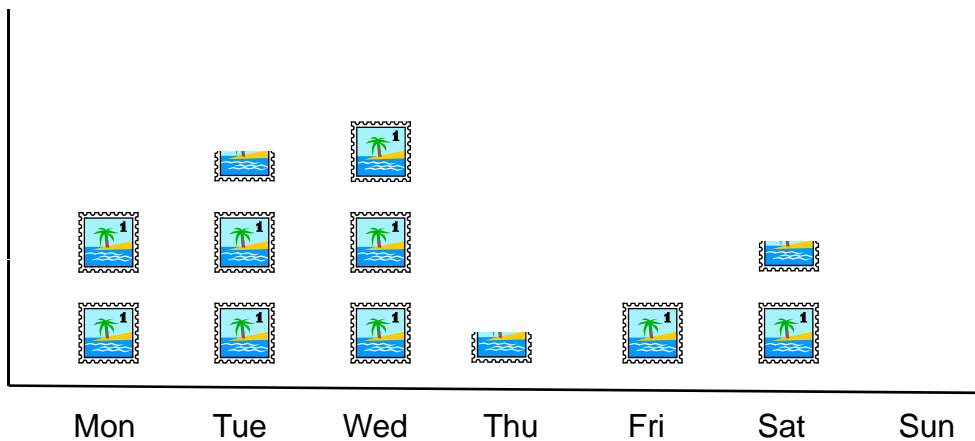
= 2



1. How many burgers were sold on each day?
2. Which day sold the most burgers?
3. Which day sold the least burgers?
4. How many more burgers were sold on Monday than Tuesday?
5. How many less were sold on Thursday than Wednesday?
6. Why were none sold on Sunday?



= 10




1. How many stamps were sold on each day?
2. Which day sold the most stamps?
3. Which day sold the least stamps?
4. How many more stamps were sold on Monday than Friday?
5. How many less were sold on Tuesday than Wednesday?
6. Why were none sold on Sunday?



Burgers sold from a Burger Van



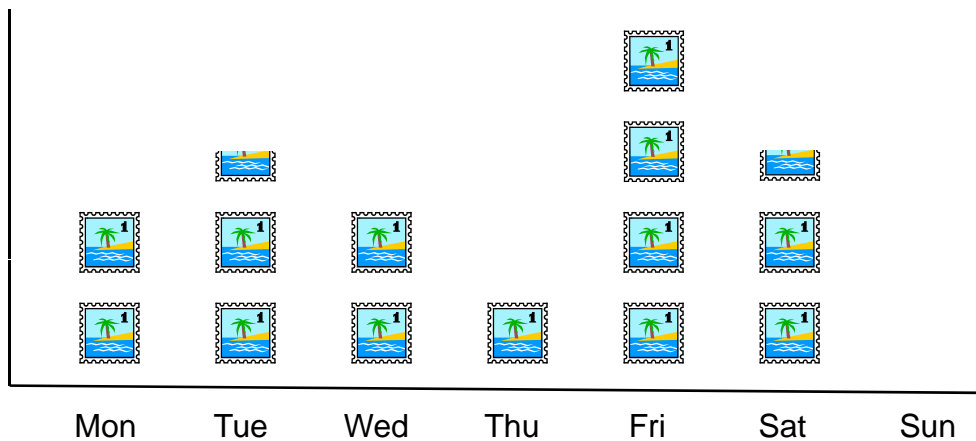
= 4



1. How many burgers were sold on each day?
2. Which day sold the most burgers?
3. Which day sold the least burgers?
4. How many more burgers were sold on Monday than Tuesday?
5. How many less were sold on Thursday than Wednesday?
6. Why were none sold on Sunday?



= 10




1. How many stamps were sold on each day?
2. Which day sold the most stamps?
3. Which day sold the least stamps?
4. How many more stamps were sold on Monday than Tuesday?
5. How many less were sold on Thursday than Wednesday?
6. Why were none sold on Sunday?



Burgers sold from a Burger Van



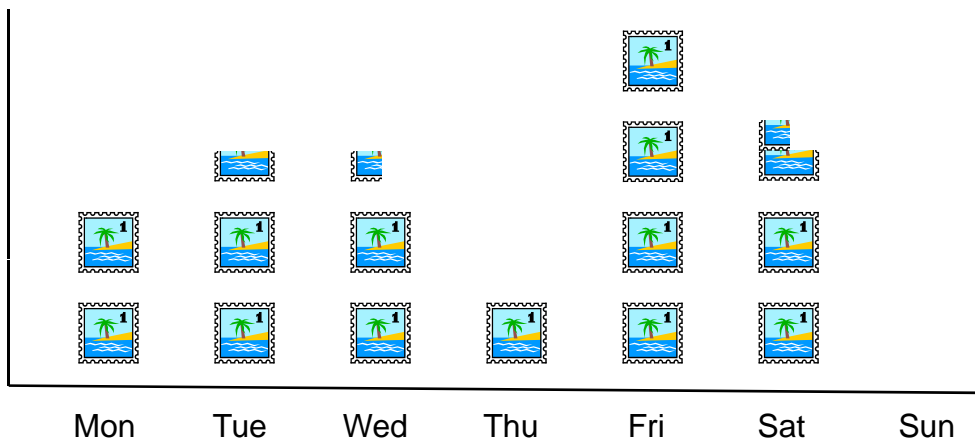
= 4



1. How many burgers were sold on each day?
2. Which day sold the most burgers?
3. Which day sold the least burgers?
4. How many more burgers were sold on Monday than Tuesday?
5. How many less were sold on Thursday than Wednesday?
6. Why were none sold on Sunday?



=
100



1. How many stamps were sold on each day?
2. Which day sold the most stamps?
3. Which day sold the least stamps?
4. How many more stamps were sold on Monday than Tuesday?
5. How many less were sold on Thursday than Wednesday?
6. Why were none sold on Sunday?