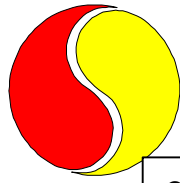
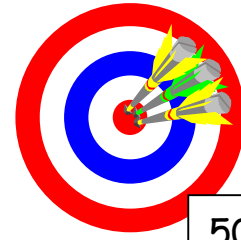
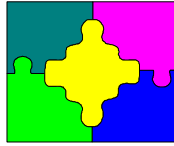


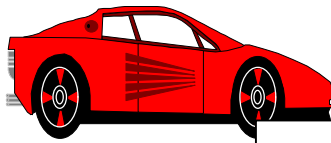
At the Toy Shop




20p




50p



35p



40p



25p

1. A car and a rabbit =
2. A ball and a dartboard =
3. A jigsaw and dominoes =
4. Dominoes and a car =
5. A rabbit and a jigsaw =
6. Imran has 60p to spend. What two toys can he buy?
7. Farah also has 60p. She buys two different toys. Which toys does she buy?
8. Sophie has 80p to spend. Which two toys does she buy?
9. Lewis has £1.00. He buys a car and a dartboard. How much change does he get?
10. Farhan buys a ball, a jigsaw and some dominoes. How much money does he need?
11. Zoe wants to buy a toy rabbit. She has only got 15p. How much more money must she save to buy the rabbit?
12. The man in the shop puts his prices up by 5p on every item. What is the new price of the toys?