

What's the percentage?


The local supermarket is having a sale. Can you work out how much money you could save?



£4.00



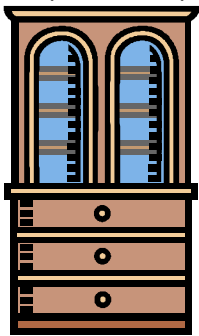
£16.00




£12.00

- 1) The shirt has 50% off in the sale. How much money would you get off?
- 2) The jacket has 25% off in the sale. How much money would you get off?
- 3) The video has 50% off in the sale. How much money would you get off?
- 4) If all the shirt, jacket and video were all reduced by 75% in the sale? How much money would you get off each item?


The supermarket is selling some more expensive items. You would need to put a deposit on them.



£400



£450



£240

- 5) The deposit for the cabinet is 25%. How much is the deposit?
- 6) The deposit for the sofa is 50%. How much is the deposit?
- 7) The deposit for the bed is 25%. How much is the deposit?