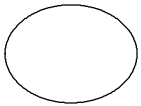
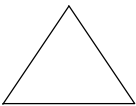


Name.....

Test 2

1. $11 \xrightarrow{1 \text{ more}} 12$
 $21 \xrightarrow{1 \text{ less}} \square$
 $49 \xrightarrow{1 \text{ more}} \square$

2. Put numbers in the shapes to add to 20

 +  = \square 20

3. Draw a circle around each **even** number

8 9 10 11 12 13 14

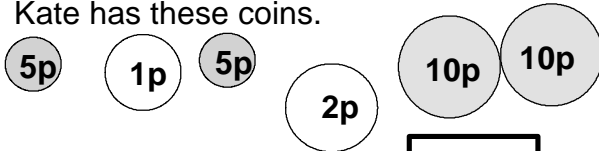
4. 30 children are in the class.

How many pairs of children are there **g**

5. Complete the number pattern

80
 Half ↓
 40
 Half ↓
 \square
 Half ↓
 \square

6. Kate has these coins.



How much altogether?

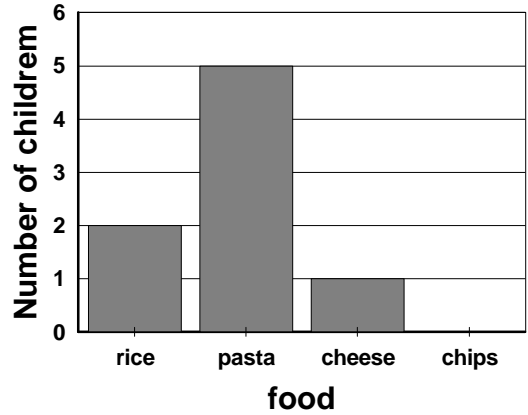
\square

7. Write these numbers in order

25 40 19 92 39 29

smallest

8. Some children made a graph of food they liked best.



6 children like chips best. Show this on the graph.

9. More children like pasta than cheese.

How many more? **g**

10. $24 \xrightarrow{10 \text{ more}} 34$
 $84 \xrightarrow{10 \text{ less}} \square$
 $92 \xrightarrow{10 \text{ more}} \square$

11. Draw a line between two different numbers that total 32.

10 16 17
 19 21
 15 16 13

12. Tick the two hexagons.

