

Date _____


Name _____

How much money?



25p

+



12p

=

_____ p



18p

+



11p

=

_____ p



16p

+



13p

=

_____ p



53p

+



31p

=

_____ p



42p


+



56p

=

_____ p



81p

+



14p

=

_____ p


Date _____

Name _____

How much change would I
have from 20p.




$$8p = \underline{\quad} p$$



$$13p = \underline{\quad} p$$



$$18p = \underline{\quad} p$$



$$6p = \underline{\quad} p$$



$$17p = \underline{\quad} p$$