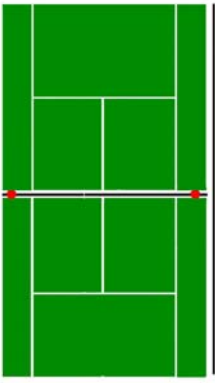


LO: I can find the perimeter of a sports pitch

1.



___ m

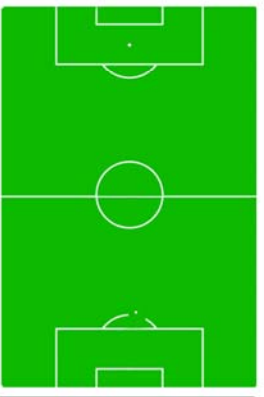
A Tennis court is 11m wide and 24m long, what is the perimeter?

___ m

Calculation: _____

Perimeter: _____

2.



___ m

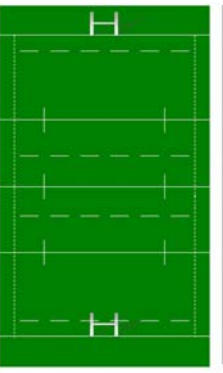
A Football pitch is 64m wide and 100m long, what is the perimeter?

___ m

Calculation: _____

Perimeter: _____

3.



___ m

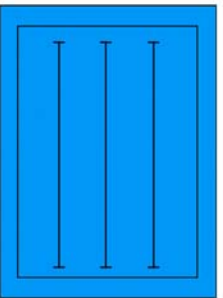
A Rugby pitch is 68m wide and 100m long, what is the perimeter?

___ m

Calculation: _____

Perimeter: _____

4.



___ m

A Swimming pool is 12m wide and 18m long, what is the perimeter?

___ m

Calculation: _____

Perimeter: _____